

Automata Theory

Fundamentele Informatica 2

Rudy van Vliet

Bachelor Informatica
Universiteit Leiden

Fall 2022



**Universiteit
Leiden**

Leiden Institute of
Advanced Computer Science

- hoorcollege: dinsdag, 13.15–15.00, Gorlaeus zaal 1
 - werkcollege: dinsdag, 15.15–17.00, Snellius (meestal) 401, 402, 403, 405, 408
- van 6 september – 13 december 2021
- college gebaseerd op boek: John C. Martin, Introduction to Languages and the Theory of Computation, 4th edition (**verkrijgbaar?**)
 - hoofdstuk 1–6 (deels)

- tentamens: maandagochtend 19 december 2022, 09.00-12.00
woensdagochtend 1 februari 2023, 09.00-12.00
- Vier huiswerkopgaven (individueel) (assistenten Perri van den Berg, Amber van den Broek, Dirck van den Ende, Andy Tatman
Niet verplicht, maar ...
eindcijfer = $70\% * \text{tentamencijfer} + 30\% * \text{cijferhuiswerkopgave}$
als tentamencijfer ≥ 5.5 , dan eindcijfer ≥ 5.5
als tentamencijfer < 5.5 , dan eindcijfer = tentamencijfer

Resultaten uit het Verleden

eerste tentamen
23 december 2021



3 of 4

hw-opgaven:

77.14%

hertentamen
3 februari 2022



0, 1 of 2

hw-opgaven

26.83%



3 of 4

hw-opgaven:

70.59%



0, 1 of 2

hw-opgaven

22.22%

Website

<http://www.liacs.leidenuniv.nl/~vlietrvan1/automata/>

- slides (dank HJH)
- overzicht van behandelde stof
- antwoorden van bepaalde opgaven
- huiswerkopgaven
- errata

Brightspace

<https://brightspace.universiteitleid.nl>

- inleveren huiswerkopgaven
- cijfers
- email
- (zo nodig) Kaltura

- Foundations of Computer Science / Fundamentele Informatica 1
- Computability / Fundamentele Informatica 3
- (Compiler Construction)

- 1 Languages
- 2 (Deterministic) Finite Automata
- 3 Non-Determinism, Regular Expressions, and Kleene's Theorem
- 4 Context-Free Languages
- 5 Pushdown Automata
- 6 Context-Free and Non-Context-Free Languages
- 7 Course Computability

Section 1

Languages

- 1 Languages
 - Origins
 - Letter, alphabet, string, language
 - Chomsky hierarchy

Possibilities / limitations of computer / algorithms

Model

Computer receives input, performs 'computation', gives output

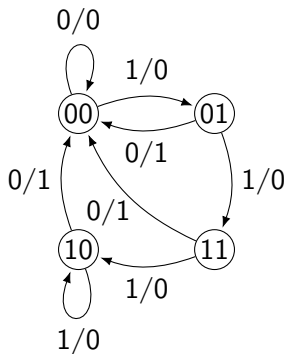
- Given instance of Nim. Who wins?
- Given sequence of numbers. Sort
- Given edge-weighted graph.
Give shortest route from A to B

Dealing with languages / sets of instances

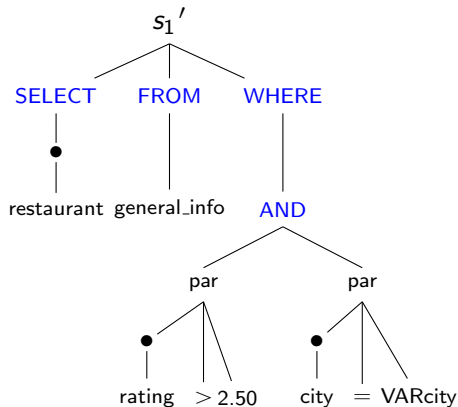
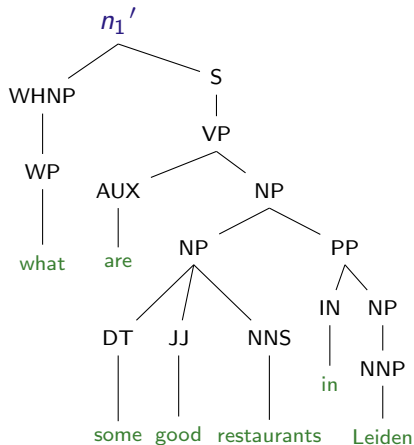
- ① Abstract machines to **accept** or to **recognize** languages
- ② Grammars to **generate** languages
- ③ Expressions to **describe** languages

- ① Logic and recursive-function theory **Introduction to Logic**
- ② Switching circuit theory and logical design **FDSD**
- ③ Modeling of biological systems, particularly developmental systems and brain activity
- ④ Mathematical and computational linguistics
- ⑤ Computer programming and the design of ALGOL and other problem-oriented languages

S.A. Greibach. Formal Languages: Origins and Directions.
Annals of the History of Computing (1981) doi:[10.1109/MAHC.1981.10006](https://doi.org/10.1109/MAHC.1981.10006)



Fundamentals of Digital Systems Design by Todor Stefanov, Leiden University



A. Giordani and A. Moschitti. Corpora for Automatically Learning to Map Natural Language Questions into SQL Queries (LREC 2010)

inductive definition (of set of strings over $\{ (,) \}$)

Example

- $\Lambda \in \textit{Balanced}$ *basis*
- for every $x, y \in \textit{Balanced}$, also $xy \in \textit{Balanced}$ *induction:1*
- for every $x \in \textit{Balanced}$, also $(x) \in \textit{Balanced}$ *:2*
- no other strings in *Balanced* *closure*

strings

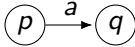
basis Λ ind:2 $(\Lambda) = ()$ ind:1 $()()$ ind:2 $(())$
 ind:1 $()()()$, $()(())$, $(())()$, ind:2 $(())()$, $((()))$

grammar

rules: $S \rightarrow \Lambda \mid SS \mid (S)$

rewriting: $S \Rightarrow SS \Rightarrow S(S) \Rightarrow (S)(S) \Rightarrow ()(S) \Rightarrow ()((S)) \Rightarrow ()(())$

[M] E 1.19 see [Dyck language](#), [Catalan numbers](#)

TYPE	grammar	automaton
3	regular $A \rightarrow aB$	regular finite automaton 
2	$A \rightarrow \alpha$	context-free pushdown (+lifo stack)
1	$(\beta_l, A, \beta_r) \rightarrow \alpha$ $\alpha \rightarrow \beta \quad \beta \geq \alpha $ monotone	context-sensitive linear bounded
0	$\alpha \rightarrow \beta$	recursively enumerable turing machine

[M] Table 8.21

letter, symbol σ $0, 1$ a, b, c

alphabet Σ $\{a, b, c\}$

(finite, nonempty)

string, word w **finite**

$w = a_1 a_2 \dots a_n$, $a_i \in \Sigma$ *abbabb*

empty string $\lambda, \Lambda, \varepsilon$

length $|x|$ $|\Lambda| = 0$ $|xy| = |x| + |y|$

concatenation $a_1 \dots a_m \cdot b_1 \dots b_n$ *ab · babb*

$w\Lambda = \Lambda w = w$ $(xy)z = x(yz)$

string $w \in \Sigma^*$ $w \in \{a, b\}^*$

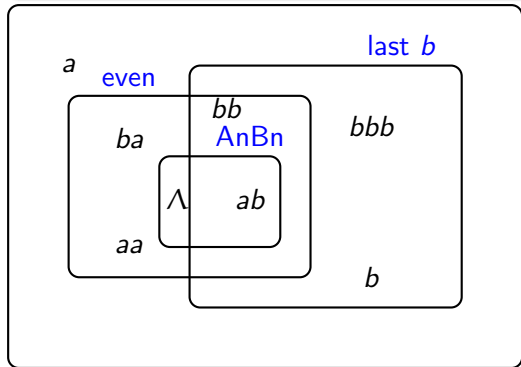
$\Sigma^* = \{\Lambda, a, b, aa, ab, ba, bb, aaa, aab, \dots\}$ *canonical order*

infinite set of finite strings

language $L \subseteq \Sigma^*$

Example

- $\{a, b\}^*$ all strings over $\{a, b\}$ $\Lambda, baa, aaaaa$
- all strings of even length $\Lambda, babbbba$
- all strings with last letter b $bbb, aabb$
- $AnBn = \{a^n b^n \mid n \in \mathbb{N}\}$ $\Lambda, aaabbb$ ($\mathbb{N} = \{0, 1, 2, 3, \dots\}$)



$\{a, b\}^*$

Λ vs. $\{\Lambda\}$ vs. \emptyset

commutativity	$A \cup B = B \cup A$...
associativity	$(A \cup B) \cup C = A \cup (B \cup C)$	
distributivity	$A \cap (B \cup C) = (A \cap B) \cup (A \cap C)$	
idempotency	$A \cup A = A$	$A \cap A = A$
De Morgan	$(A \cup B)^c = A^c \cap B^c$	
unit	$A \cup \emptyset = A$	$A \cap U = A$
	$A \cap \emptyset = \emptyset$	$A \cup U = U$
involution	$(A^c)^c = A$	
complement	$A \cap A^c = \emptyset$	
		duality

brackets

priority c before \cup, \cap

$K \cap L \cup M$??

[M] page 4 FDSD, FOCS

Definition

$$K \cdot L = KL = \{ xy \mid x \in K, y \in L \}$$

$$\{a, ab\}\{a, ba\} = \{aa, aba, abba\}$$

one $\{\Lambda\}L = L\{\Lambda\} = L$

zero $\emptyset L = L\emptyset = \emptyset$

associative $(KL)M = K(LM)$

$$L^0 = \{\Lambda\}, \text{ even if } L = \emptyset, \text{ c.f. } 0^0$$

$$L^1 = L, \quad L^2 = LL, \dots$$

$$L^{n+1} = L^n L.$$

Definition

$$L^* = \bigcup_{n \geq 0} L^n$$

$$L^n = \underbrace{L \cdot L \cdot \dots \cdot L}_{n \text{ times}}$$

$$L^n = \{ w_1 w_2 \dots w_n \mid w_1, w_2, \dots, w_n \in L \} \quad \text{fixed } n$$

$$L^* = \{ w_1 w_2 \dots w_n \mid w_1, w_2, \dots, w_n \in L, n \in \mathbb{N} \}$$

c.f. Σ^*

Example

$$\{a\}^* \cdot \{b\} = \{\Lambda, a, aa, aaa, \dots\} \cdot \{b\} = \{b, ab, aab, aaab, \dots\}$$

$$\begin{aligned} (\{a\}^* \cdot \{b\})^* &= \{b, ab, aab, aaab, \dots\}^* = \\ &= \{\Lambda, b, ab, bb, aab, abb, bab, bbb, aaab, \dots\} \end{aligned}$$

$$(\{a\}^* \cdot \{b\})^* = \{a, b\}^* \{b\} \cup \{\Lambda\}$$

family all languages that can be defined by

- type of automata
(deterministic) finite aut. FA, NFA, pushdown aut. PDA
- type of grammar
context-free grammar CFG, regular (aka right-linear)
- certain operations
regular REG

Boolean operations: $\cup, \cap, ^c$

Regular operations: $\cup, \cdot, *$

family F *closed under* operation ∇ :

if $K, L \in F$, then $K \nabla L \in F$.

RECOGNIZING, algorithm

$$L_2 = \{ x \in \{a, b\}^* \mid n_a(x) > n_b(x) \}$$

count a and b

deterministic [finite] automaton

GENERATING, description

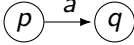
regular expression

$$L_1 = (\{ab, bab\}^* \{b\})^* \{ab\} \cup \{b\} \{ba\}^* \{ab\}^*$$

recursive definition

\hookrightarrow well-formed formulas

grammar

TYPE	grammar	automaton
3	regular $A \rightarrow aB$	regular finite automaton 
2	$A \rightarrow \alpha$	context-free pushdown (+lifo stack)
1	$(\beta_l, A, \beta_r) \rightarrow \alpha$ $\alpha \rightarrow \beta \quad \beta \geq \alpha $ monotone	context-sensitive linear bounded
0	$\alpha \rightarrow \beta$	recursively enumerable turing machine

[M] Table 8.21

- clever idea, **intuition**
- formal **construction**, specification
- **show** it works, e.g., induction

once the idea is understood,
the other parts might be boring

but essential to test **intuition**

examples help to get the message

L_1, L_2, L_3 are languages over some alphabet Σ .

For each pair of languages below, what is their relationship?

Are they always equal? If not, is one always a subset of the other?

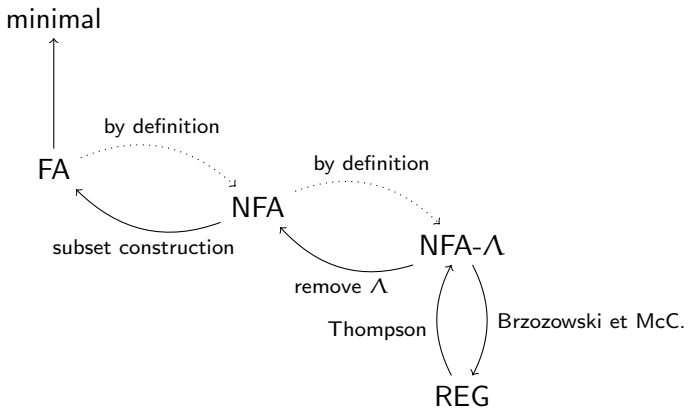
① $L_1(L_2 \cap L_3)$ vs. $L_1L_2 \cap L_1L_3$

② $L_1^* \cap L_2^*$ vs. $(L_1 \cap L_2)^*$

③ $L_1^*L_2^*$ vs. $(L_1L_2)^*$

[M] Exercise 1.37

¹A quiz is a brief assessment used in education to measure growth in knowledge, abilities, and/or skills. [Wikipedia](#)

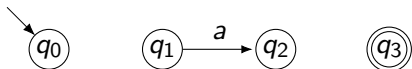


Section 2

(Deterministic) Finite Automata

2 (Deterministic) Finite Automata

- Examples
- FA definition
- Boolean operations
- Decision problems
- Distinguishing strings
- Equivalence classes
- Minimization
- Pumping lemma

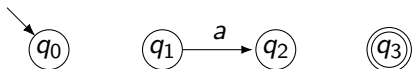


Example

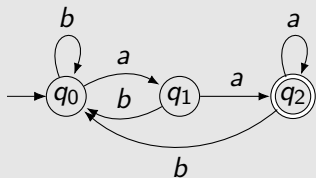
$$L_1 = \{ x \in \{a, b\}^* \mid x \text{ ends with } aa \}$$

...

[M] E. 2.1



Example

$$L_1 = \{ x \in \{a, b\}^* \mid x \text{ ends with } aa \}$$


δ	a	b
q_0	q_1	q_0
q_1	q_2	q_0
q_2	q_2	q_0

[M] E. 2.1

Example

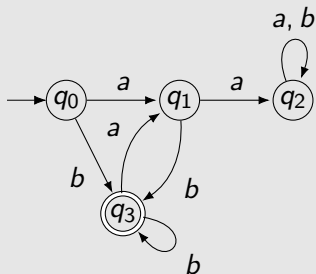
$L_2 = \{ x \in \{a, b\}^* \mid x \text{ ends with } b \text{ and does not contain } aa \}$

...

[M] E. 2.3

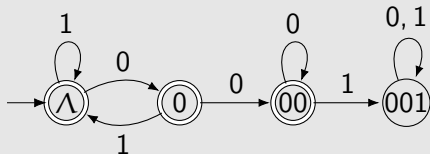
Example

$L_2 = \{ x \in \{a, b\}^* \mid x \text{ ends with } b \text{ and does not contain } aa \}$



[M] E. 2.3

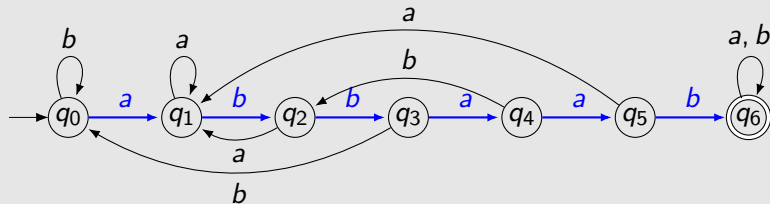
Example (Strings not containing 001)



[L] E 2.4

Example (Similar to Knuth-Morris-Pratt string search)

$L_3 = \{ x \in \{a, b\}^* \mid x \text{ contains the substring } abbaab \}$



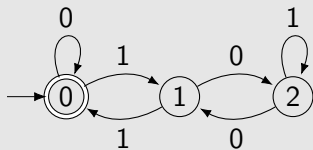
[M] E. 2.5

$w \in \{0, 1\}^* \longrightarrow \text{val}(w) \in \mathbb{N}$

$\text{val}(w0) = \dots$

$\text{val}(w1) = \dots$

Example



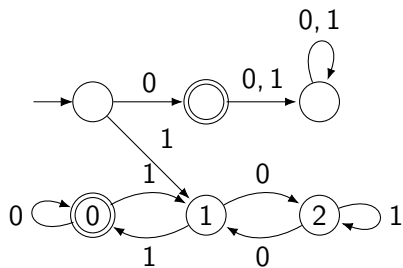
δ	0	1
x	$2x$	$2x + 1$
0	0	1
1	2	0
2	1	2

$w \in \{0, 1\}^* \longrightarrow \text{val}(w) \in \mathbb{N}$

$\text{val}(w0) = 2 \cdot \text{val}(w)$

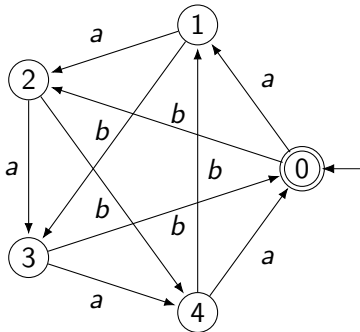
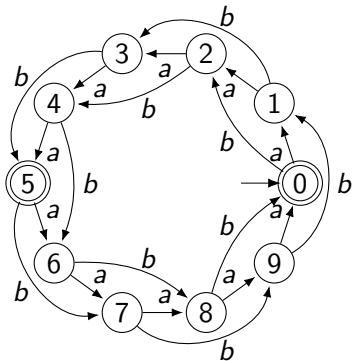
$\text{val}(w1) = 2 \cdot \text{val}(w) + 1$

states represent $\text{val}(w)$ modulo 3



[M] E. 2.7

$$\{ x \in \{a, b\}^* \mid n_a(x) + 2n_b(x) \equiv 0 \pmod{5} \}$$



☒cs.SE Planar regular languages

Een student vroeg of alle automaten zonder kruisende takken getekend konden worden. De automaat rechts heeft de vorm van K_5 (de volledige graaf op vijf knopen) waarvan bekend is dat die niet planair is.

Dezelfde taal kan echter wel met een vlakke automaat verkregen worden (links). Er zijn talen zonder vlakke automaat.